



# INDIAN SCHOOL AL WADI AL KABIR

## FINAL ASSESSMENT REVISION 2025 – 2026

<b>NAME:</b>		<b>DATE:</b> / /
<b>CLASS: III SEC:</b> _____ <b>ROLL NO:</b> _____	<b>SUBJECT: EVS</b>	<b>TR'S SIGN:</b>

### General Instructions:

- This paper consists of 3 sections and 4 pages.
- All questions are compulsory.

### SECTION – A

#### I. Read the following questions and circle the correct option.

1. A class of students went on a field trip. They had to cross a river to reach a nearby village. Which means of transport will they use?  
a. bicycle                      b. bullock cart                      c. tonga                      d. boat
2. A rough drawing of a place is called a \_\_\_\_\_ .  
a. sketch                      b. landmark                      c. symbol                      d. key
3. \_\_\_\_\_ are sent through computers and cellular phones on the internet.  
a. SMS                      b. E-mails                      c. Post cards                      d. Speed post
4. Honking of horns causes \_\_\_\_\_ .  
a. Air Pollution                      b. Water Pollution                      c. Noise Pollution                      d. Soil Pollution
5. Nowadays, phones are mainly used to send messages. Which means of communication was used earlier to send urgent messages?  
a. inland letter                      b. aerograms                      c. telegrams                      d. stamped envelope
6. Rahim is a physically challenged person. Which vehicle should he use to travel from one place to another?  
a. postal van                      b. vendor cart                      c. tricycle                      d. fire engine
7. Rahul wanted to locate a place in the colony. What will help him to locate the place?  
a. road map                      b. colony map                      c. atlas                      d. sketch
8. We should plant more trees because they clean the \_\_\_\_\_ .  
a. wood                      b. air                      c. water                      d. soil

**II. Match the following.**

COLUMN A		COLUMN B	
1.	compass	a.	Instagram
2.	landmark	b.	transports sick people
3.	social media	c.	loudspeakers
4.	ambulance	d.	cheapest means of communication
5.	noise pollution	e.	shows directions
6.	Postal system	f.	Burj Khalifa

1. \_\_\_\_\_ 2. \_\_\_\_\_ 3. \_\_\_\_\_ 4. \_\_\_\_\_ 5. \_\_\_\_\_ 6. \_\_\_\_\_

**III. State whether the following statements are True or False.**

1. In a map, our right side shows the east and our left side shows the west. \_\_\_\_\_
2. An airplane uses electricity as its fuel. \_\_\_\_\_
3. An auto rickshaw has three wheels. \_\_\_\_\_
4. Most of the air pollution is caused by animals. \_\_\_\_\_
5. We can send audio and video clips through Whats App. \_\_\_\_\_
6. Washing clothes on the riverbanks can cause water pollution. \_\_\_\_\_

**IV. Establish the relationship and fill in the blanks.**

1. Fax machine : electronic form :: Postal system : \_\_\_\_\_
2. Karnataka : south :: Bihar : \_\_\_\_\_
3. Car : petrol :: train : \_\_\_\_\_
4. \_\_\_\_\_ : air pollution :: bathing animals : water pollution

**V. Rewrite the sentences correctly.**

1. Soil, water, petroleum and coal are known as **pollution**.

\_\_\_\_\_

\_\_\_\_\_

2. In **villages**, we use metro trains as means of land transport.

\_\_\_\_\_

\_\_\_\_\_

3. A **symbol** is a book of maps.

\_\_\_\_\_

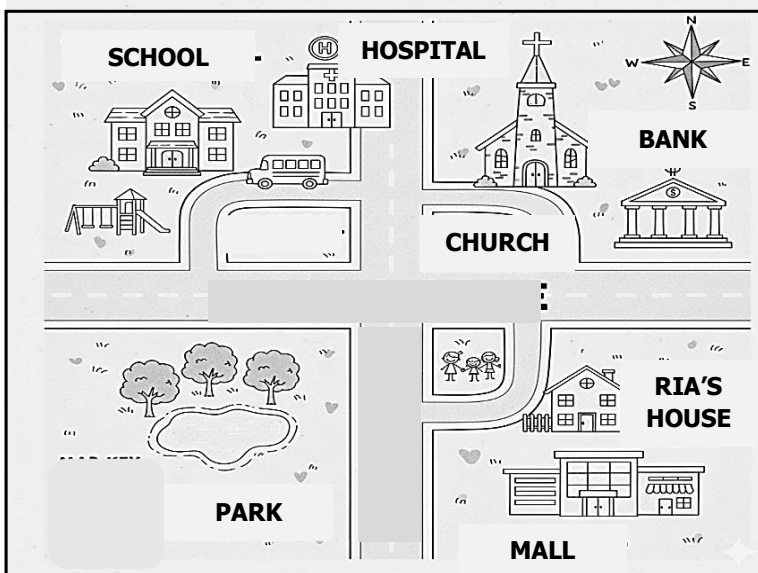
4. A **telephone** is a wireless instrument.

\_\_\_\_\_

**SECTION B**

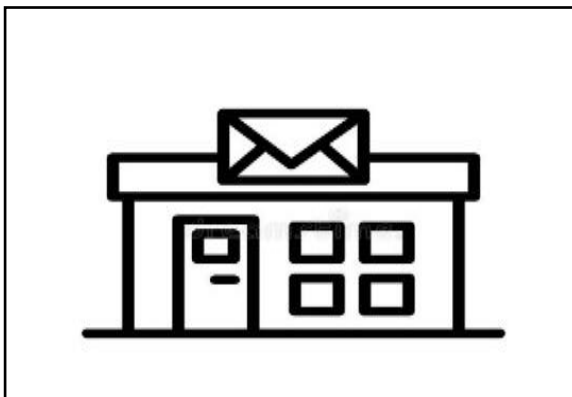
**VI. Observe the given pictures and answer the questions that follow.**

**1. Tina bought a map from the store. Help her to locate the places using the map.**




- a. If we travel north from the mall we will reach \_\_\_\_\_.
- b. If we travel \_\_\_\_\_ from the church we will reach the hospital.
- c. If we travel south from the school we will reach which landmark?  
\_\_\_\_\_
- d. When you travel east from the school you will reach one landmark. Draw the symbol of that landmark. \_\_\_\_\_

**2. Rahul observes a building in the city. Guide Rahul to know more about the place.**




- a. What means of communication is shown in the picture?  
\_\_\_\_\_
- b. This place also provides a courier mail service called \_\_\_\_\_
- c. We can buy \_\_\_\_\_ and \_\_\_\_\_ from this place.

**3. Roy observes a vehicle passing by the street. Roy wants to learn about this vehicle.**



- a. Which special means of transport is shown in this picture?  
\_\_\_\_\_
- b. This is a vehicle which is used for?  
\_\_\_\_\_  
\_\_\_\_\_
- c. Give one eg. of another special means of transport used in today's world.  
\_\_\_\_\_

4. Minu makes a chart for the class display board. Minu wants to explain about the chart to her friends.



- a. The resources shown in the picture are called \_\_\_\_\_
- b. Give 2 examples of renewable sources of energy.  
\_\_\_\_\_ / \_\_\_\_\_
- c. Give 2 examples of non – renewable sources of energy.  
\_\_\_\_\_ / \_\_\_\_\_

**SECTION – C**

**VII. Answer the following questions.**

1. List two ways to prevent water pollution.

---

---

---

---

2. What is a map? How does a colony map help us?

---

---

---

---

3. What is the difference between STD and ISD?

STD	ISD

